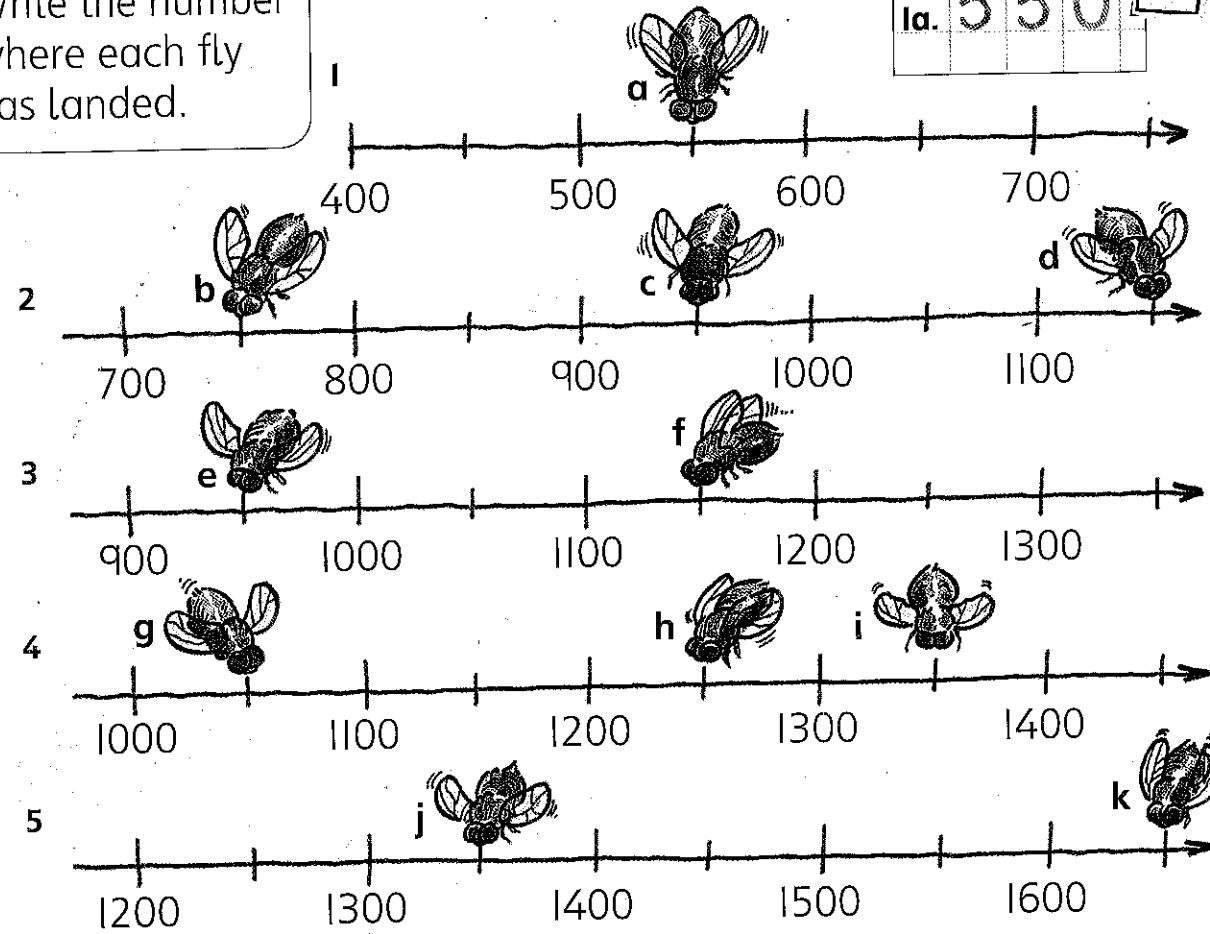


Counting in 50s



Write the number where each fly has landed.



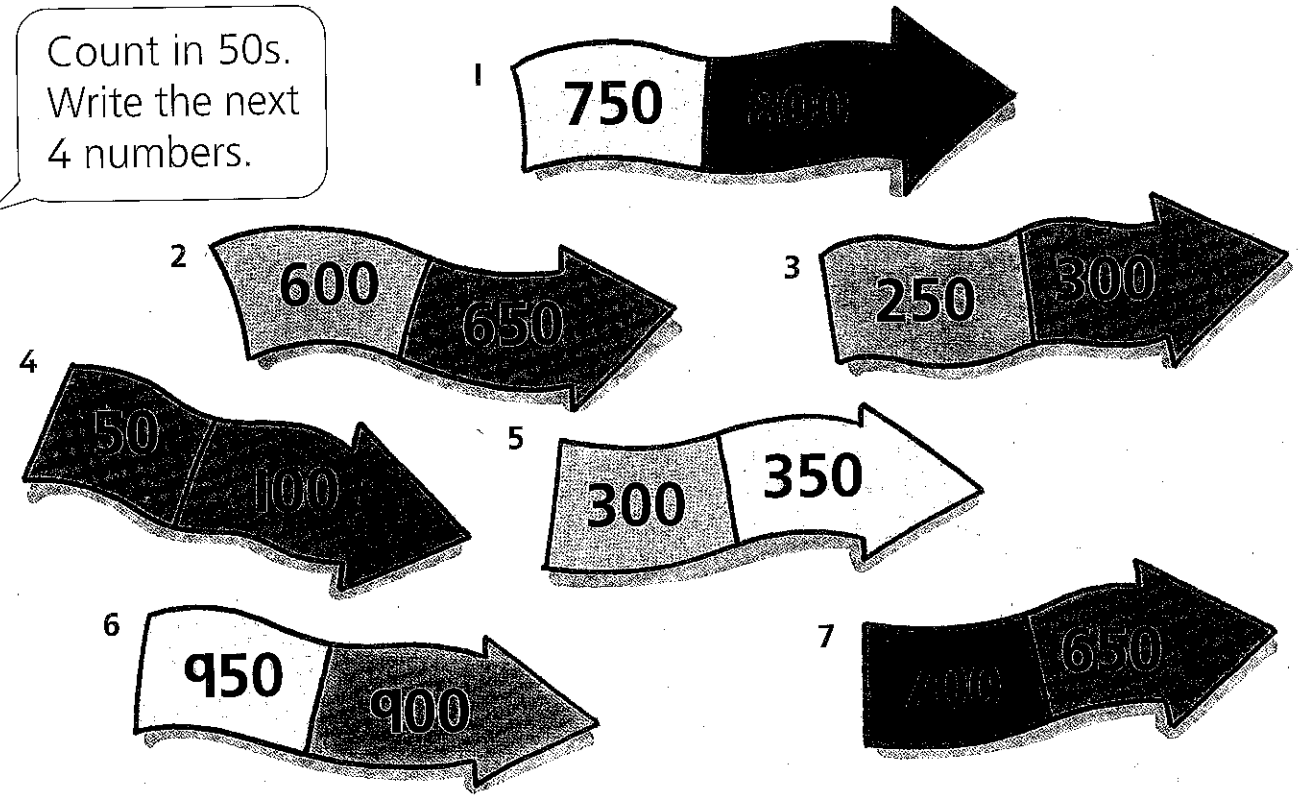
1a. 550



Counting in 50s

850, 900, 950, 1000

Count in 50s. Write the next 4 numbers.



Count on in 100s. Write the next 3 numbers.

6 464

6. 564
664
764

7 347
11 688
15 707

8 579
12 299
16 519


9 545
13 342
17 202

10 494
14 656
18 98




Write the numbers 100 less.


Problems




Sara has £2.50 pocket money. Dad gives her 50p more. How much now?



The kitten weighs 350 g. She puts on 50 g each week. How heavy is she after 3 weeks?



Andrew's snake was 25 cm long. It grew 50 cm. How long is it now?



The balloon is 750 m above the ground. It falls 50 m each minute. How high is it after 5 minutes?

10 more, 10 less, 100 more, 100 less

Write the number for each letter.

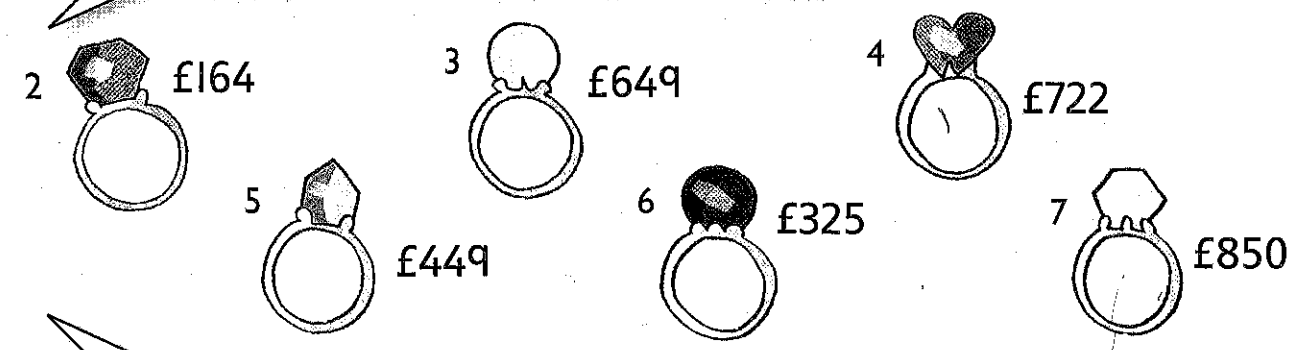
1. 430

100	110	120	130	140	150	160	170	180	190
200	210	220	230	240	250	260	270	280	290
300	310	320	330	340	350	360	370	380	390
400	410		a						490
500	510		530		b	560		c	
600		d				e			n
j			f	740			770		g
800		m			h	i			890
900	910	920	930				l		k

What are the numbers in the bottom row?

Take off £10 from the price of each jewel.

2. £154





The price of gold has gone up! Add £100 to each price.

1 more, 1 less, 10 more, 10 less

Write the year before and the year after.

1. 2495, 2497



How many numbers between 1000 and 2000 have a 9 in them?

True or false?

- 7. 100 more than 436 is the same as 10 less than 546.
- 8. 10 less than 202 is the same as 100 more than 102.
- 9. 10 more than 400 is the same as 10 less than 410.
- 10. A decade later than the year 1890 is a century before the year 2000.
- 11. £10 more than £999 is the same as £1 less than £1000.
- 12. Half of 240 is more than 110 less than 240.