

Work out 10 more and 10 less than these numbers:

10 less		10 more
	25	
	153	
	538	
	272	
	831	
400		
	97	
	104	
		496

Work out 10 more and 10 less than these numbers:

10 less		10 more
	25	
	153	
	538	
	272	
	831	
400		
	97	
	104	
		496


Work out 100 more and less than these numbers:

100 less		100 more
	169	
	240	
	399	
	666	
793		
	404	
		678
	295	
		202


Work out 100 more and less than these numbers:

100 less		100 more
	169	
	240	
	399	
	666	
793		
	404	
		678
	295	
		202


Fill in the missing number:




10 less



10 more




100 less




100 more


Fill in the missing number:




10 less



10 more



100 less



100 more