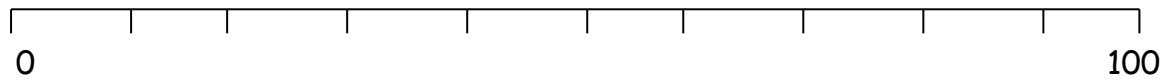


1. This is a 0 to 100 number line. It is marked in tens.
Write these numbers in the correct place on the number line.

50

30

90

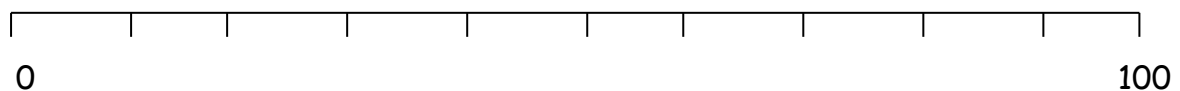


2. This is a 0 to 100 number line. It is marked in tens.
Write these numbers in the correct place on the number line.

10

70

40

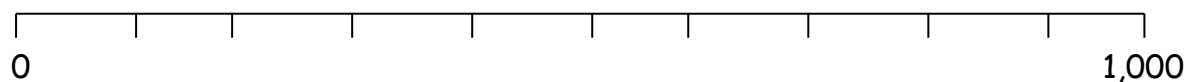


3. This is a 0 to 1,000 number line. It is marked in hundreds.
Write these numbers in the correct place on the number line.

500

700

100

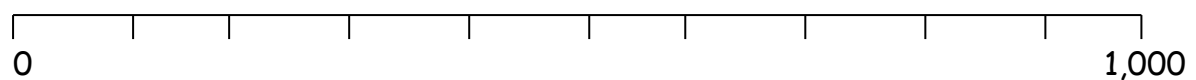


4. This is a 0 to 1,000 number line. It is marked in hundreds.
Write these numbers in the correct place on the number line.

300

800

400

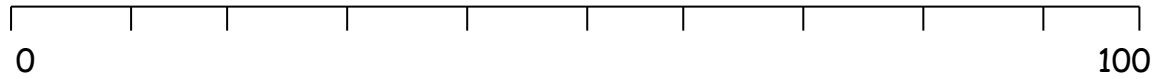


1. This is a 0 to 100 number line. It is marked in tens.
Write these numbers in the correct place on the number line.

50

30

90

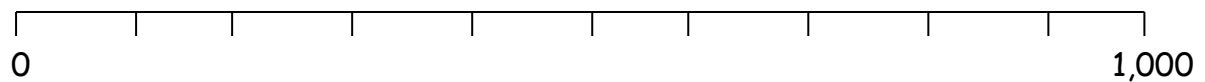


2. This is a 0 to 1,000 number line. It is marked in hundreds.
Write these numbers in the correct place on the number line.

500

700

100

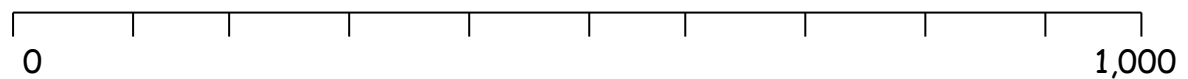


3. This is a 0 to 1,000 number line. It is marked in hundreds.
Write these numbers in the correct place on the number line.

300

800

400

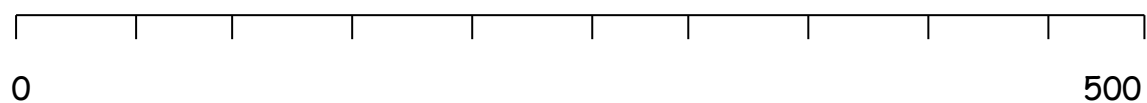


4. This is a 0 to 10,000 number line. It is marked in thousands.
Write these numbers in the correct place on the number line.

100

150

300



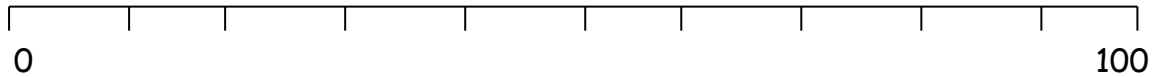
1. This is a 0 to 100 number line. It is marked in tens.

Write these numbers in the correct place on the number line.

50

30

90



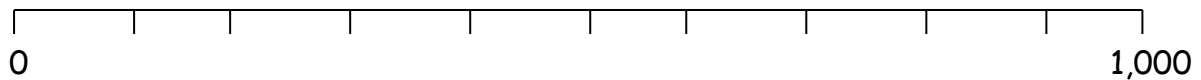
2. This is a 0 to 1,000 number line. It is marked in hundreds.

Write these numbers in the correct place on the number line.

500

700

100



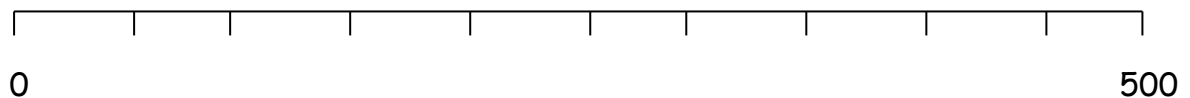
3. This is a 0 to 10,000 number line. It is marked in fifties.

Write these numbers in the correct place on the number line.

100

200

450



4. This is a 0 to 500 number line. It is marked in fifties.

Write these numbers in the correct place on the number line.

150

300

450

